

Name





Date



COUNTING QUARTERS SHEET 1 ANSWERS

Count the quarters. Work out the amounts in cents.



	25 ¢ \$ 0.25
	<u>50</u> ¢ \$ <u>0.50</u>
	<u>75</u> ¢ \$ <u>0.75</u>
	<u>100</u> ¢ \$ <u>1</u>
	<u>125</u> ¢ \$ <u>1.25</u>
	<u>150</u> ¢ \$ <u>1.50</u>

1 quarter = <u>25</u> ¢	2 quarters = <u>50</u> ¢	3 quarters = <u>75</u> ¢
4 quarters = \$ <u>1</u>	5 quarters = \$ <u>1.25</u>	6 quarters = \$ <u>1.50</u>

