

Name \_\_\_\_\_







Date \_\_\_\_\_



# COUNTING QUARTERS SHEET 1

Count the quarters. Work out the amounts in dollars and cents.



	25 ¢ \$ 0.25	
		_____ ¢ \$ _____
		_____ ¢ \$ _____
		_____ ¢ \$ _____
		_____ ¢ \$ _____
		_____ ¢ \$ _____

Use your answers to fill in the table below

1 quarter = _____ ¢	2 quarters = _____ ¢	3 quarters = _____ ¢
4 quarters = \$ _____	5 quarters = \$ _____	6 quarters = \$ _____