

Algebra 1


GRAPHING QUADRATICS WRITTEN IN VERTEX FORM

Worksheet

GRAPHING QUADRATICS IN VERTEX FORM Practice Worksheet


1 Graph $f(x) = (x+2)^2 + 3$

Vertex: _____




2 Graph $f(x) = (x-2)^2 + 3$

Vertex: _____




3 Graph $f(x) = (x+2)^2 - 3$

Vertex: _____



4 Graph $f(x) = (x-2)^2 - 3$

Vertex: _____



5 Graph $f(x) = (x-4)^2 + 2$

Vertex: _____



6 Graph $f(x) = (x+4)^2 + 2$

Vertex: _____

