

Name

Date



AREA AND PERIMETER SHEET 2 ANSWERS

1)



Area = 12 square cm

Perimeter = 16 cm

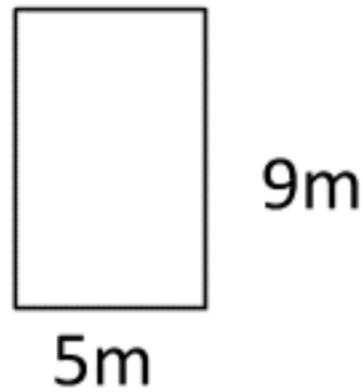
2)



Area = 15 square mm

Perimeter = 16 mm

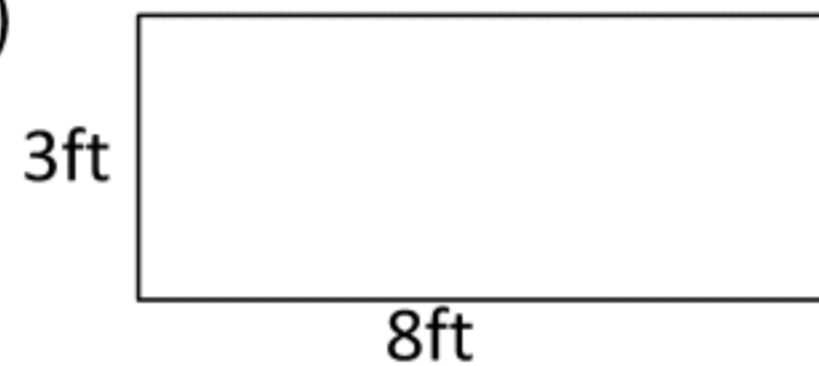
3)



Area = 45 square m

Perimeter = 28 m

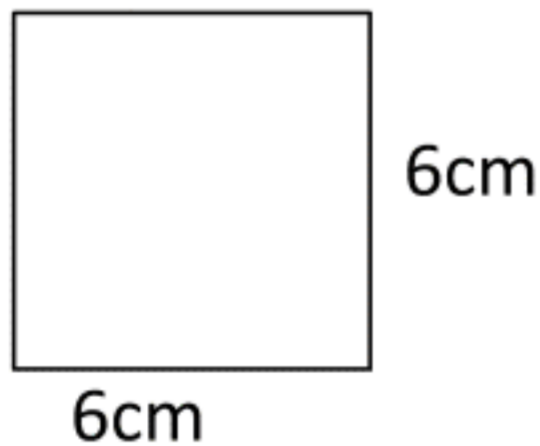
4)



Area = 24 square ft

Perimeter = 22 ft

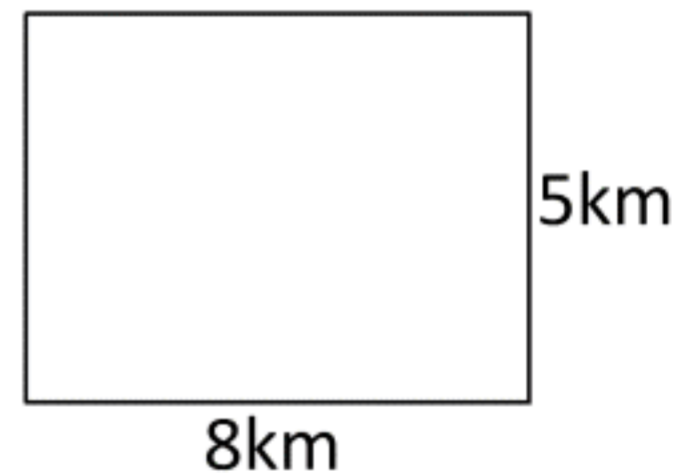
5)



Area = 36 square cm

Perimeter = 24 cm

6)



Area = 40 square km

Perimeter = 26 km

