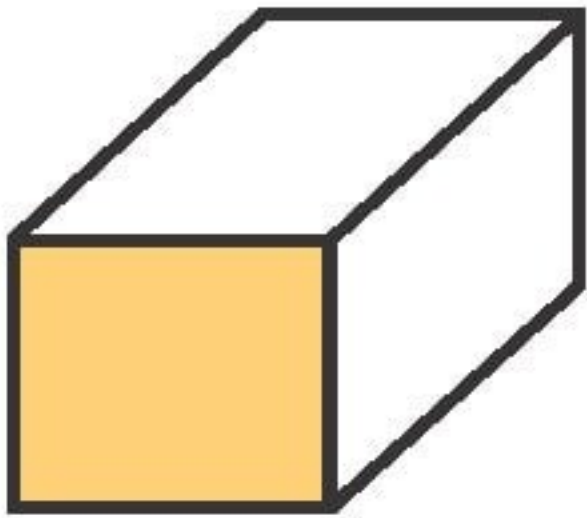
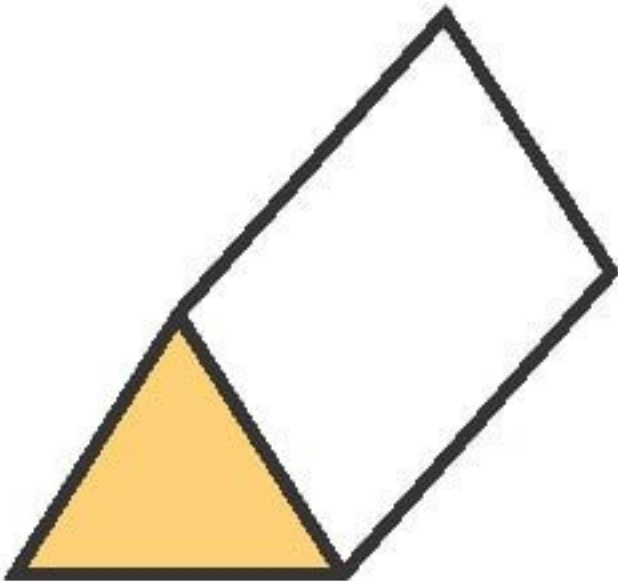
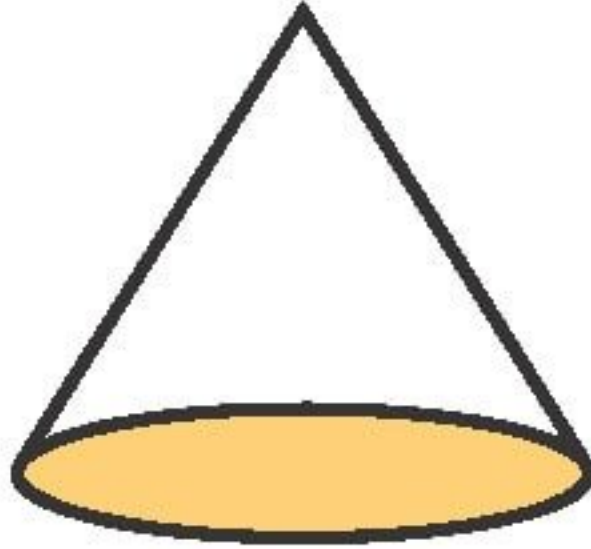
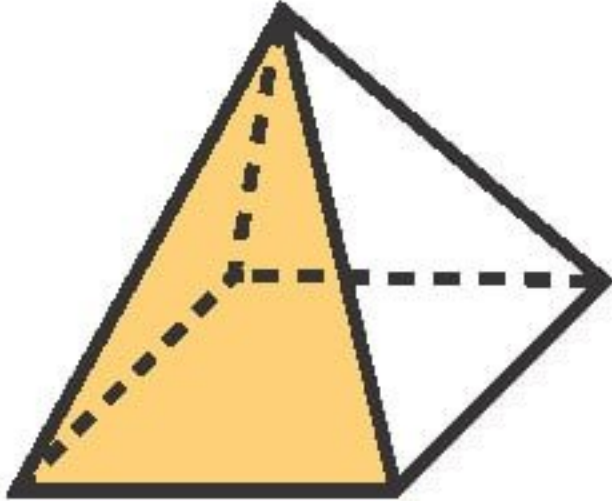
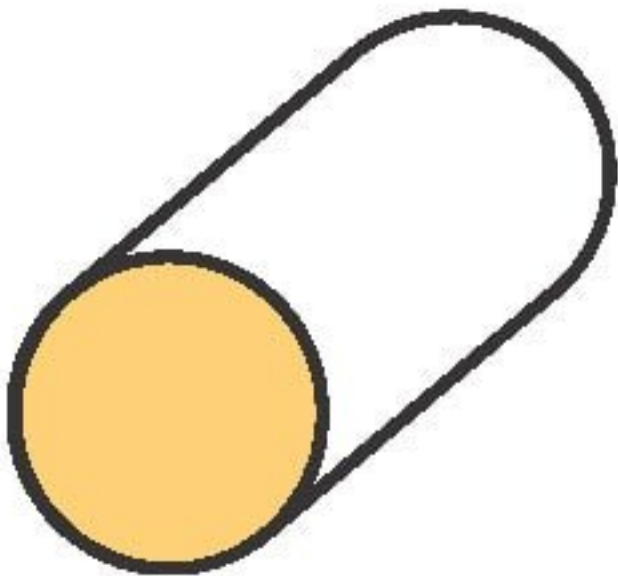
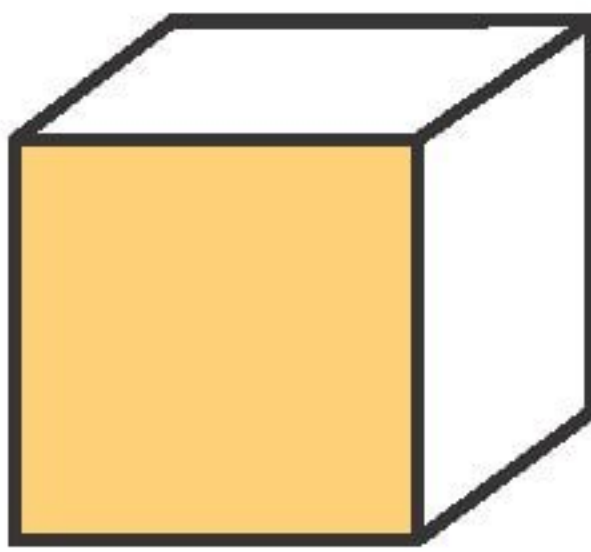

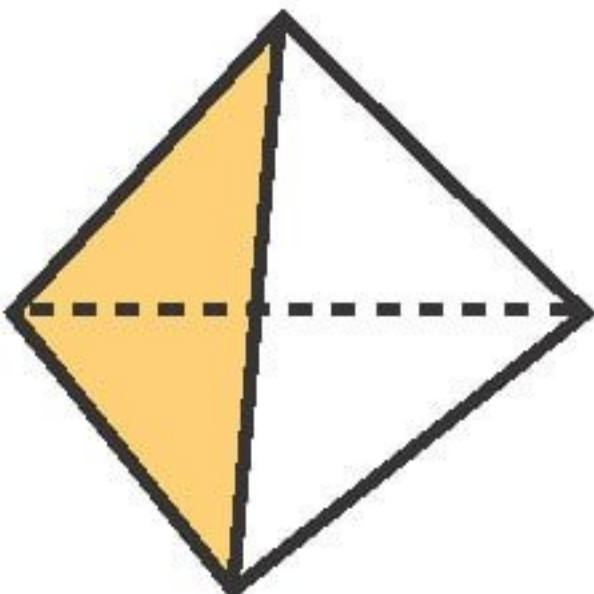
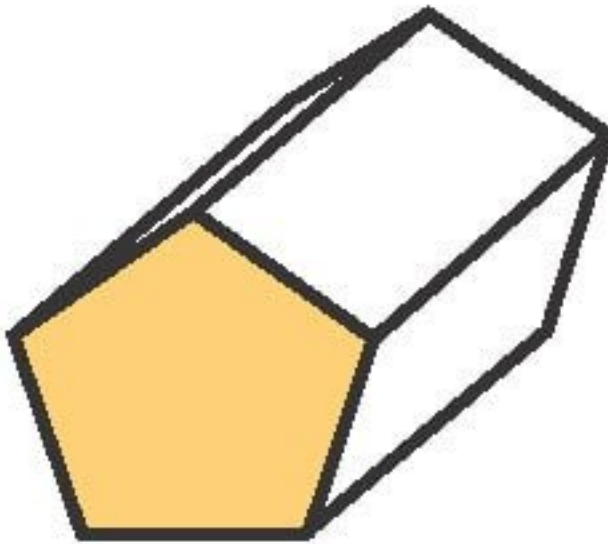





Properties of 3D Shapes



1)	Name: _____ Vertices: _____ Faces: _____ Edges: _____	2)	Name: _____ Vertices: _____ Faces: _____ Edges: _____	3)	Name: _____ Vertices: _____ Faces: _____ Edges: _____
					
4)	Name: _____ Vertices: _____ Faces: _____ Edges: _____	5)	Name: _____ Vertices: _____ Faces: _____ Edges: _____	6)	Name: _____ Vertices: _____ Faces: _____ Edges: _____
					
7)	Name: _____ Vertices: _____ Faces: _____ Edges: _____	8)	Name: _____ Vertices: _____ Faces: _____ Edges: _____	9)	Name: _____ Vertices: _____ Faces: _____ Edges: _____
					

Extension

Shapes A and B are types of prisms and shape C is a type of pyramid. Work out what shapes they are.

A)	Name: _____ Vertices: _____ Faces: _____ Edges: _____	B)	Name: _____ Vertices: _____ Faces: _____ Edges: _____	C)	Name: _____ Vertices: _____ Faces: _____ Edges: _____
	12 8 18		16 10 24		6 6 10