



Name \_\_\_\_\_ Date \_\_\_\_\_

Use the models to subtract the decimals shown.




$0.84 - 0.23 =$  \_\_\_\_\_




$0.49 - 0.21 =$  \_\_\_\_\_



$0.71 - 0.53 =$  \_\_\_\_\_




$0.37 - 0.14 =$  \_\_\_\_\_




$0.56 - 0.35 =$

\_\_\_\_\_



$0.68 - 0.41 =$

\_\_\_\_\_



$0.43 - 0.17 =$

\_\_\_\_\_