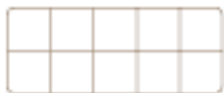
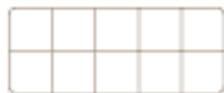


# LET'S MAKE 10



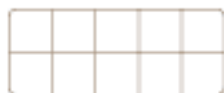
$$\square + \square = 10$$



$$\square + \square = 10$$



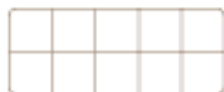
$$\square + \square = 10$$



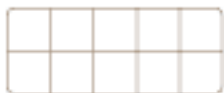
$$\square + \square = 10$$



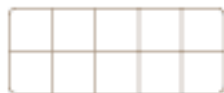
$$\square + \square = 10$$



$$\square + \square = 10$$



$$\square + \square = 10$$



$$\square + \square = 10$$

Name: \_\_\_\_\_