









## ACTIVITY 9

**DIRECTIONS:** Fill in the chart using Y for yes or N for no as you solve the puzzle.

A fireman, doctor, boy, and girl all live in different houses. Find which house belongs to each person.

1. The girl's house has more than two windows and is not the widest.
2. The fireman's house has fewer than three windows.
3. The doctor's house has one more window than the fireman's and two more windows than the boy's.