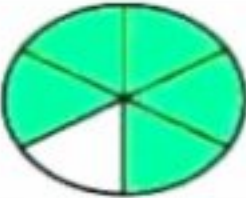






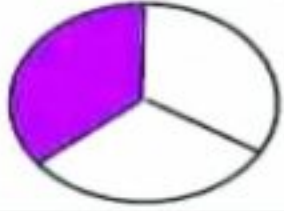



# Multiple Choice Fractions worksheets grade 1

Pick the right fraction represented by the shaded part of each shape. First one is done as an example;

1)		$\frac{1}{2}$	$\frac{3}{6}$	$\frac{5}{6}$	$\frac{1}{6}$	$\frac{6}{5}$
2)		$\frac{1}{4}$	$\frac{3}{4}$	$\frac{1}{6}$	$\frac{1}{3}$	$\frac{1}{5}$
3)		$\frac{1}{2}$	$\frac{3}{8}$	$\frac{1}{6}$	$\frac{1}{7}$	$\frac{6}{8}$
4)		$\frac{1}{3}$	$\frac{3}{6}$	$\frac{1}{2}$	$\frac{1}{5}$	$\frac{1}{4}$
5)		$\frac{4}{6}$	$\frac{5}{6}$	$\frac{4}{5}$	$\frac{1}{6}$	$\frac{3}{5}$
6)		$\frac{1}{3}$	$\frac{1}{4}$	$\frac{1}{2}$	$\frac{1}{5}$	$\frac{2}{1}$
7)		$\frac{1}{2}$	$\frac{3}{4}$	$\frac{5}{6}$	$\frac{1}{4}$	$\frac{4}{3}$
8)		$\frac{1}{6}$	$\frac{2}{3}$	$\frac{3}{3}$	$\frac{1}{3}$	$\frac{2}{5}$
9)		$\frac{3}{5}$	$\frac{3}{4}$	$\frac{5}{4}$	$\frac{4}{6}$	$\frac{4}{5}$