




January 2020 Problem of the Day

January Problem of the Day			SUNDAY	MONDAY	TUESDAY	WEDNESDAY	THURSDAY	FRIDAY	SATURDAY
						$15 - 14 =$ <input type="text"/>	How much more is 18 than 16? <input type="text"/>	You had 6 apples, but ate 3. How many remain? <input type="text"/>	How many tens are in 543? <input type="text"/>
What number is 5 less than 10? <input type="text"/>	What number is in the hundreds place: 672 <input type="text"/>	Find the missing number: $3 + ? = 10$ <input type="text"/>	What number is 20 less than 28? <input type="text"/>	3 groups of 3 is equal to: <input type="text"/>	$2 + 5 + 3 =$ <input type="text"/>	Sam picks 5 flowers and Ann picks 6. How many did they pick total? <input type="text"/>	Sara made 30 cookies. Her family ate 12. How many are left? <input type="text"/>	What number is 1 less than $9 + 9$? <input type="text"/>	What is the value of 2 dimes and 1 nickel? <input type="text"/>
$30 - 18 =$ <input type="text"/>	What number is 6 less than 19? <input type="text"/>	$7 + 7 =$ <input type="text"/>	Complete the sequence: 6, 9, 12, ... <input type="text"/>	6 birds are in the nest and 10 are flying. How many are there altogether? <input type="text"/>	Complete the sequence: 17, 19, 21, ... <input type="text"/>	7 more than 24 is equal to: <input type="text"/>	How many minutes are in a half hour? <input type="text"/>	Ten less than 39 is equal to: <input type="text"/>	There are 18 large marbles and 12 small. How many are there in all? <input type="text"/>
Find the sum of 8 and 11. <input type="text"/>	How many minutes are shown on the clock? <input type="text"/> 	Which number is less, 25 or 21? <input type="text"/>	There are 10 red cars, 10 blue cars and 2 green cars. How many are there total? <input type="text"/>	Complete the sequence: 17, 19, 21, ... <input type="text"/>	$8 + 8 + 8 =$ <input type="text"/>	7 more than 24 is equal to: <input type="text"/>	How many minutes are in a half hour? <input type="text"/>	Ten less than 39 is equal to: <input type="text"/>	There are 18 large marbles and 12 small. How many are there in all? <input type="text"/>
$... + 10 =$ <input type="text"/>	What number is greater, 24 or 27? <input type="text"/>	There are 18 large marbles and 12 small. How many are there in all? <input type="text"/>	Ten less than 39 is equal to: <input type="text"/>	How many minutes are in a half hour? <input type="text"/>	7 more than 24 is equal to: <input type="text"/>	How many minutes are in a half hour? <input type="text"/>	Ten less than 39 is equal to: <input type="text"/>	How many minutes are in a half hour? <input type="text"/>	How many minutes are in a half hour? <input type="text"/>

FREE! 3 Levels for
Grades K-8